

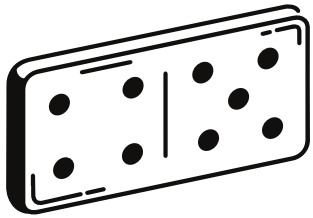



$$\dots - 6 = 3$$

$$\dots - 3 = 6$$

$$3 + 6 = \dots$$

$$6 + 3 = \dots$$

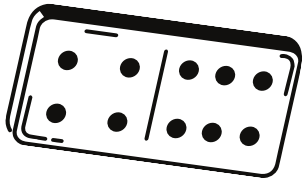



$$\dots - 5 = 4$$

$$\dots - 4 = 5$$

$$4 + 5 = \dots$$

$$5 + 4 = \dots$$





$$\dots - 6 = 4$$

$$\dots - 4 = 6$$

$$4 + 6 = \dots$$

$$6 + 4 = \dots$$

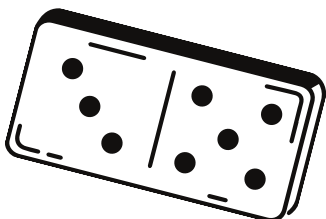



$$\dots - 5 = 5$$

$$\dots - 5 = 5$$

$$5 + 5 = \dots$$

$$5 + 5 = \dots$$





$$\dots - 5 = 3$$

$$\dots - 3 = 5$$

$$3 + 5 = \dots$$

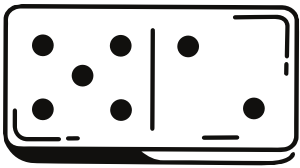

$$5 + 3 = \dots$$





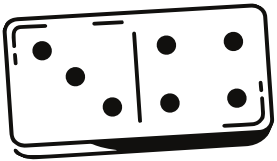

$$\dots - 6 = 2$$
$$\dots - 2 = 6$$

$$2 + 6 = \dots$$
$$6 + 2 = \dots$$



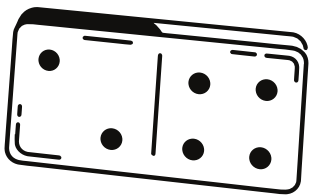

$$\dots - 5 = 2$$
$$\dots - 2 = 5$$

$$5 + 2 = \dots$$
$$2 + 5 = \dots$$



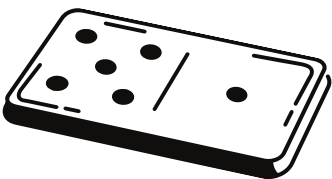

$$\dots - 4 = 3$$
$$\dots - 3 = 4$$

$$3 + 4 = \dots$$
$$4 + 3 = \dots$$




$$\dots - 4 = 2$$
$$\dots - 2 = 4$$

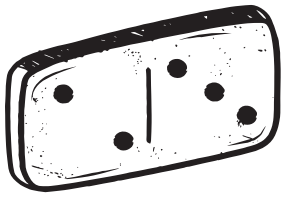
$$2 + 4 = \dots$$
$$4 + 2 = \dots$$



$$\dots - 5 = 1$$
$$\dots - 1 = 5$$



$$5 + 1 = \dots$$
$$1 + 5 = \dots$$





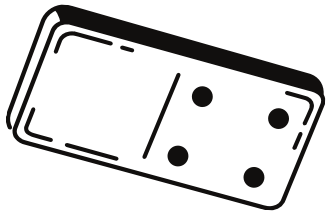

$$\dots - 2 = 3$$
$$\dots - 3 = 2$$

$$3 + 2 = \dots$$
$$2 + 3 = \dots$$





$$\dots - 5 = 0$$
$$\dots - 0 = 5$$

$$5 + 0 = \dots$$
$$0 + 5 = \dots$$



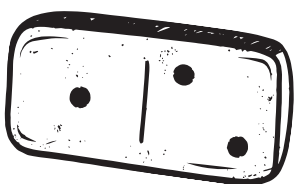

$$\dots - 4 = 0$$
$$\dots - 0 = 4$$

$$4 + 0 = \dots$$
$$0 + 4 = \dots$$




$$\dots - 1 = 3$$
$$\dots - 3 = 1$$

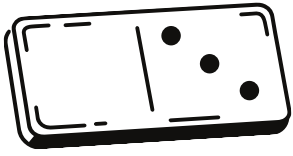
$$3 + 1 = \dots$$
$$1 + 3 = \dots$$



$$\dots - 2 = 1$$
$$\dots - 1 = 2$$



$$2 + 1 = \dots$$
$$1 + 2 = \dots$$







$$\dots - 0 = 3$$
$$\dots - 3 = 0$$

$$3 + 0 = \dots$$
$$0 + 3 = \dots$$



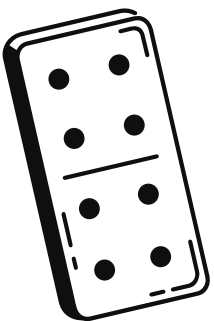

$$\dots - 6 = 5$$
$$\dots - 5 = 6$$

$$5 + 6 = \dots$$
$$6 + 5 = \dots$$





$$\dots - 6 = 6$$
$$\dots - 6 = 6$$

$$6 + 6 = \dots$$
$$6 + 6 = \dots$$



$$\dots - 4 = 4$$
$$\dots - 4 = 4$$

$$4 + 4 = \dots$$
$$4 + 4 = \dots$$



$$\dots - 3 = 3$$
$$\dots - 3 = 3$$

$$3 + 3 = \dots$$
$$3 + 3 = \dots$$

